



SOL 2.13

5. Estimate and determine the number of square units in the shaded area.




- A** 15
- B** 16
- C** 17
- D** 20

6. Estimate and determine the number of square units in the shaded area.




- A** 16
- B** 17
- C** 18
- D** 19

7. Estimate and determine the number of square units in the shaded area.



- A** 3
- B** 4
- C** 5
- D** 6

8. Estimate and determine the number of square units in the shaded area.



- A** 9
- B** 10
- C** 11
- D** 12