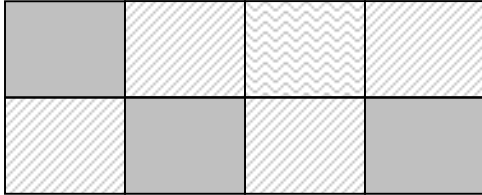



8. Sandra made the pattern below. She used gray, striped, and wavy squares. What amount of the total area has gray squares?



- A $\frac{1}{8}$
- B $\frac{2}{8}$
- C $\frac{3}{8}$
- D $\frac{4}{8}$

9. Look at the shape below.



What amount of the total area is shaded?


A $\frac{1}{2}$

B $\frac{4}{3}$

C $\frac{2}{4}$

D $\frac{3}{4}$

10. What amount of the total area is NOT shaded?



A $\frac{1}{2}$

B $\frac{1}{3}$

C $\frac{2}{3}$

D $\frac{3}{4}$