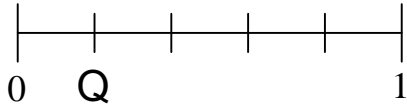


NF.2a

3. What fraction is shown by Q on the number line?



A  $\frac{1}{5}$

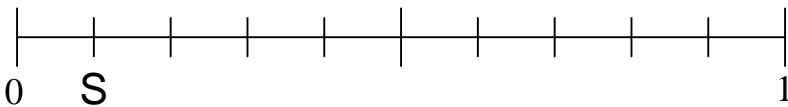
B  $\frac{2}{5}$

C  $\frac{1}{4}$

D  $\frac{4}{5}$

NF.2a

4. What fraction is shown by S on the number line?



A  $\frac{10}{1}$

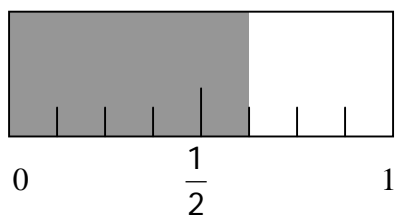
B  $\frac{1}{8}$

C  $\frac{1}{9}$

D  $\frac{1}{10}$

NF.2b

5. What part of the ruler is shaded?



A  $\frac{1}{3}$

B  $\frac{2}{4}$

C  $\frac{3}{4}$

D  $\frac{5}{8}$