

# **TESTS FOR HIGHER STANDARDS**

# **MATHEMATICS**

**South Carolina College- and Career-Readiness Standards**

## **GRADE LEVEL TEST**

# **Grade 4**

**Dr. S. Stuart Flanagan, Professor Emeritus  
College of William and Mary**

**Copyright ©2016, S. Stuart Flanagan and David E. W. Mott  
Do not reproduce without permission. 7-1-16**

NSBT.3

**5. What is 1,735 rounded to the nearest hundred?**

- A** 1,700
- B** 1,740
- C** 1,800
- D** 1,850

NSBT.4

**6. Subtract:  $8,000 - 1,908 = ?$**

- A** 6,092
- B** 6,192
- C** 6,908
- D** 7,092

NSBT.4

**7. Add:  $269 + 348 + 711 + 98 = ?$**

- A** 1,326
- B** 1,406
- C** 1,426
- D** 1,436

NSBT.5

**8. Roberta has a coin collection. Her collection fills 25 pages, front only. On each page there are 31 coins. How many coins does Roberta have?**

- A** 56 coins
- B** 675 coins
- C** 775 coins
- D** 900 coins


NSF.7

**22. Which number sentences are true?**


- A**  $0.77 < 0.7$
- B**  $0.5 < 0.53$
- C**  $0.96 < 0.69$
- D**  $0.05 > 0.5$
- E**  $0.34 < 0.42$
- F**  $0.9 > 0.89$

NSF.7

**23. Here is a model of 0.42.**



**Here is a model of 0.45.**



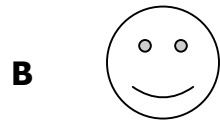
**Which statement is true about these models?**

- A**  $0.42 > 0.45$  because it has 3 more hundredths
- B**  $0.45 > 0.42$  because it has 3 more hundredths
- C**  $0.42 < 0.45$  because it has 3 more tenths
- D**  $0.45 > 0.42$  because it has 3 more tenths

G.4

**44. In which of these figures can you draw a line of symmetry?**

**A** 2



**D** 4

**E** H

MDA.1

**45. Bob bought 5 boxes of cereal. Each box weighed 400 grams. How many kilograms do all the boxes weigh?**



- A** 2 kilograms
- B** 12 kilograms
- C** 20 kilograms
- D** 200 kilograms